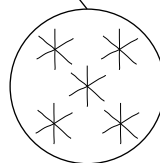
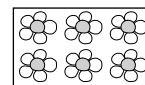
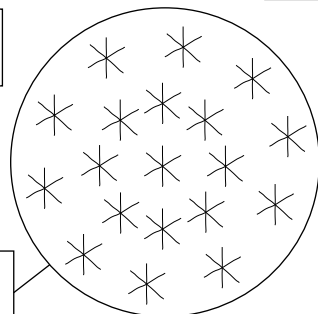
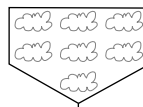
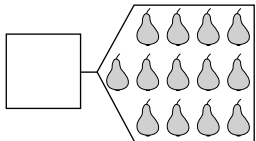
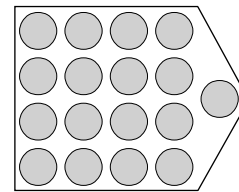
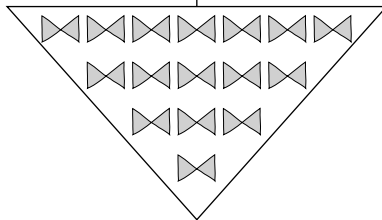
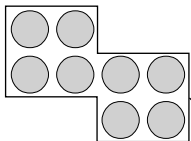
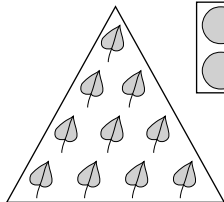

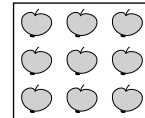
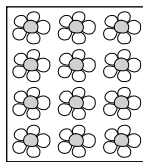
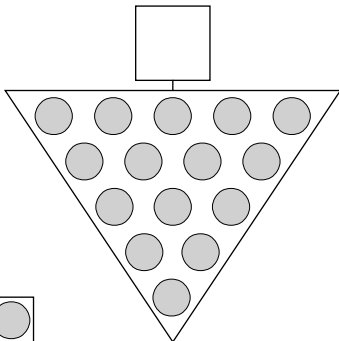




1 Zapiš kolik.



1 Dopln.



2 Vyřeš.

$$\square \text{ (eye)} + \square \text{ (smile)} = \square$$

$$\square \text{ (eye)} + \square \text{ (spikes)} = \square$$

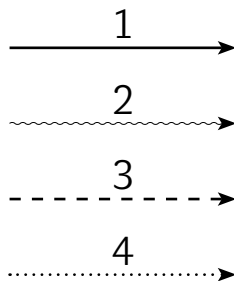
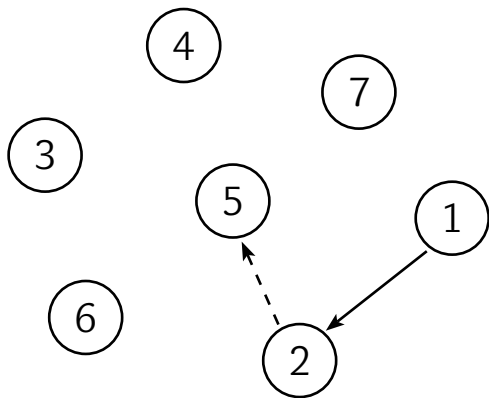
$$\square \text{ (cloud)} + \square \text{ (spikes)} + \square \text{ (flower)} = \square$$

$$\square \text{ (eye)} + \square \text{ (cloud)} + \square \text{ (spikes)} + \square \text{ (flower)} + \square \text{ (smile)} = \square$$

1 Vyřeš součtové trojúhelníky.

3	+	4	7	7	+	8	12	+		11	4		8	7	
				7					18				11	14	

15	5	3	12	6		9			6	4		3	17		14
				18		17		15		20				20	

2  Doplně mezi čísla šipky.

19

14

17

16

18

20

15



1 Počítej do 20.

$$14 + 3 = \square$$

$$4 + 13 = \square$$

$$7 + 7 = \square$$

$$\square + 3 = 12$$

$$12 + \square = 17$$

$$\square + 6 = 16$$



$$18 - 4 = \square$$

$$12 - 5 = \square$$

$$16 - 8 = \square$$

$$\square - 10 = 10$$

$$20 - \square = 7$$

$$\square - 7 = 13$$



$$20 - 8 + 6 = \square$$

$$9 + 9 + 0 = \square$$

$$12 + 8 - 2 = \square$$


$$16 - 9 + 11 = \square$$

$$7 - 2 + \square = 18$$

$$17 - \square + 13 = 18$$



2 Kudy poletí muška?



1  Vystřihni a slož autobus. Pomocí autobusu a figurek si zahraj úlohu.

Na zastávce A nastoupili do autobusu
2 cestující.

Ze zastávky A na zastávku B jeli _____
cestující.

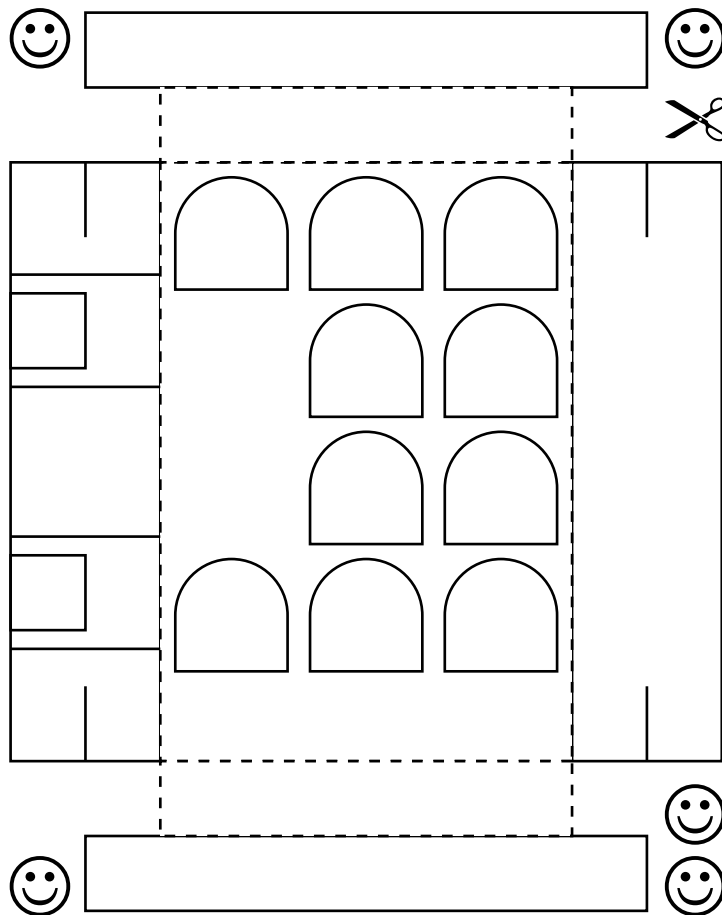
Na zastávce B vystoupil 1 cestující
a 2 nastoupili.

Ze zastávky B do zastávky C jeli _____
cestující.

Na zastávce C vystoupili 2 cestující
a nastoupil 1.

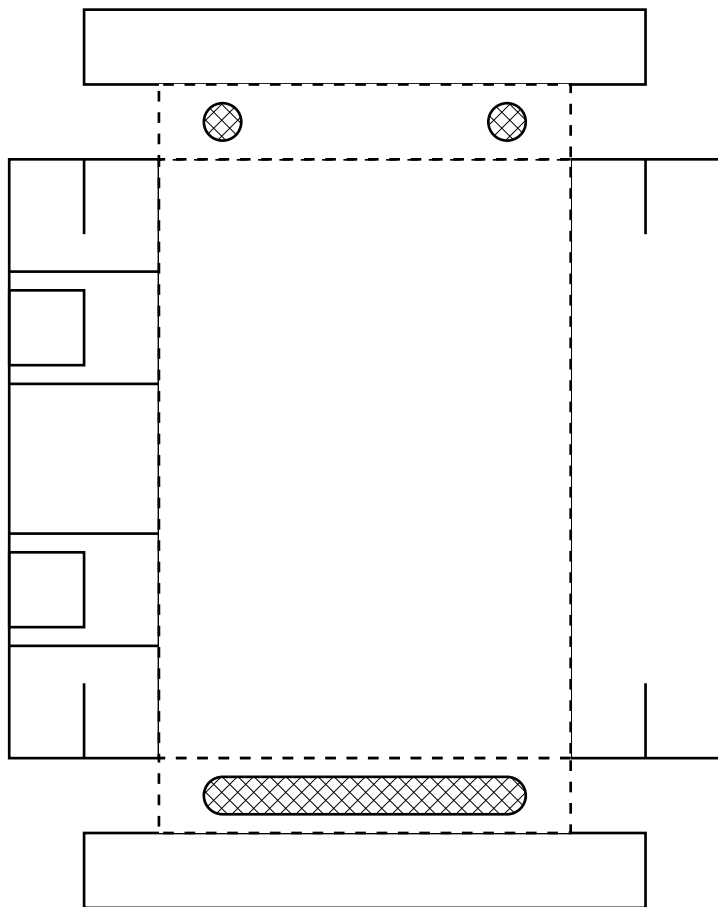
Ze zastávky C do zastávky D jeli _____
cestující.

Na zastávce D všichni cestující
vystoupili. _____



6

1  Zahraj si nové úlohy s autobusem a doplň tabulky.

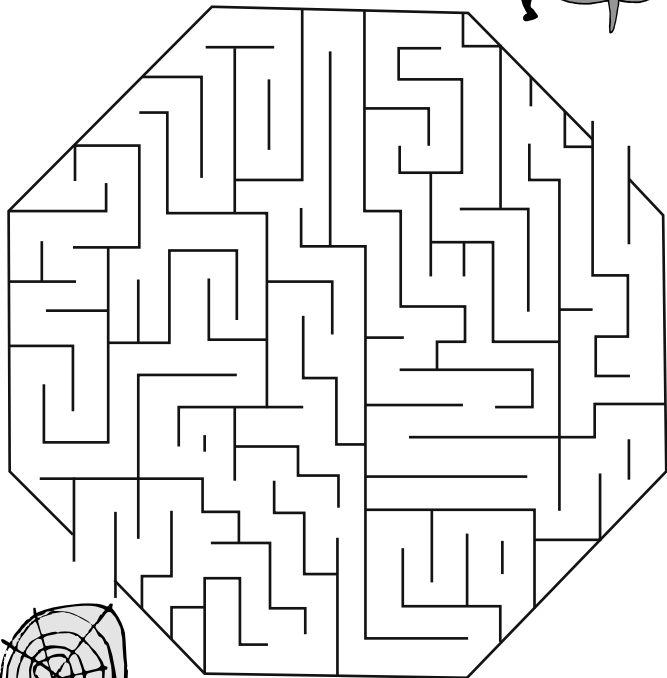


	A	B	C	D	E
Vystoupili	-	1	1	3	
Nastoupili	1	2	3	2	-
Jeli					

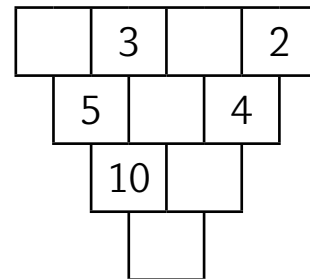
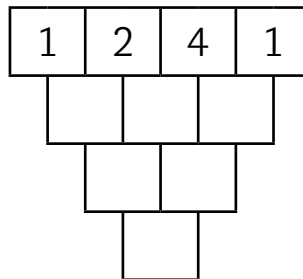
	A	B	C	D	E
Vystoupili	-	2	2	0	
Nastoupili	3	1		3	-
Jeli				1	

	A	B	C	D	E
Vystoupili	-	3	1	5	
Nastoupili	5	2	7		-
Jeli					11

1 **복합** Dostane se pavouček domů?



2 Vyřeš.



3 Hledej více řešení.

Petr má dvoukoruny a pětikoruny. Dohromady má 19 Kč. Kolik má dvoukorun a kolik pětikorun?



1 Počítej do 23.

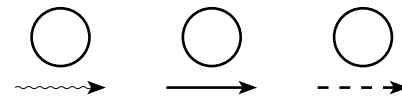
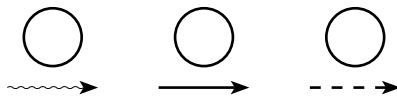
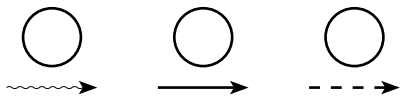
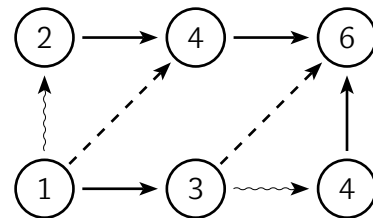
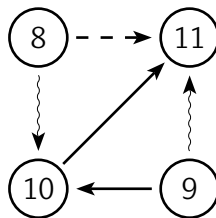
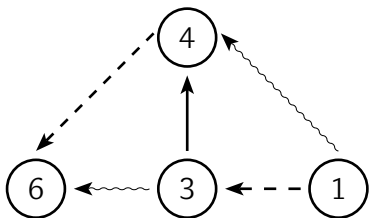
$$\begin{array}{r}
 10 + 13 = \square \\
 20 + 3 = \square \\
 19 + 4 = \square \\
 18 + 5 = \square \\
 \square + 15 = 23 \\
 3 + \square = 23 \\
 \square + 10 = 23
 \end{array}$$



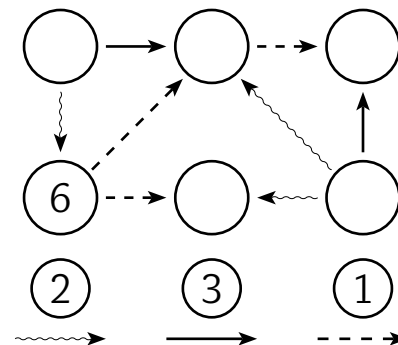
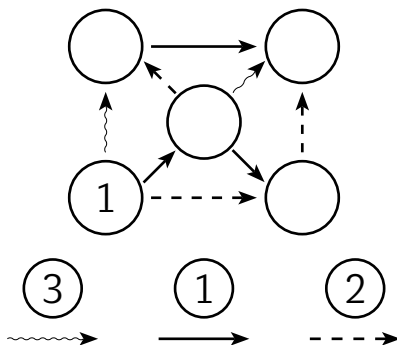
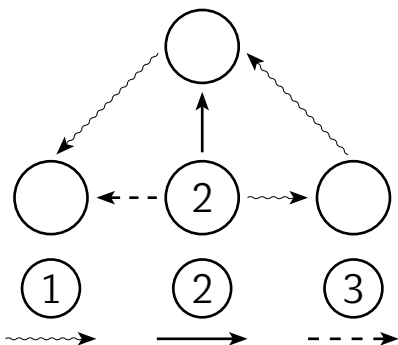
$$\begin{array}{r}
 23 - 1 = \square \\
 23 - 11 = \square \\
 23 - 3 = \square \\
 23 - 13 = \square \\
 \square - 6 = 17 \\
 23 - \square = 7 \\
 \square - 7 = 15
 \end{array}$$



$$\begin{array}{r}
 10 + 10 = \square + 8 \\
 20 + \square = 19 + 4 \\
 13 + 10 = 12 + \square \\
 \square + 15 = 6 + 17 \\
 23 - 2 = \square - 1 \\
 19 - \square = 23 - 9 \\
 22 - 4 = 23 - \square
 \end{array}$$

2  Dopln k šipkám čísla.

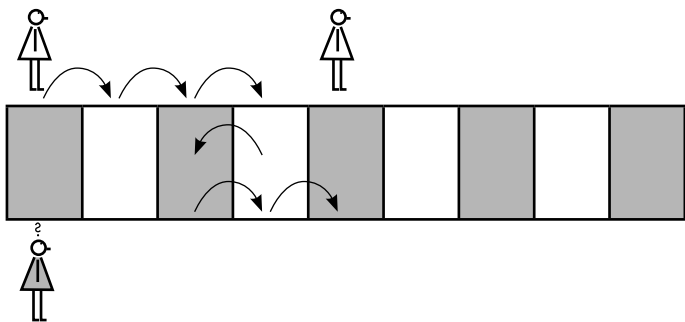
1 Dopln čísla.



2 Pokračuj.



3 Krokuj a vyřeš.



Irena a Dana stály vedle sebe. Irena udělala tři kroky dopředu, jeden dozadu a dva kroky dopředu.

Dana udělala _____ kroky dopředu a obě stály zase vedle sebe.

10

1 Počítej do 25.

$$\begin{array}{r} 20 + 5 = \square \\ 25 - 5 = \square \\ 10 + 15 = \square \\ 24 - 5 = \square \\ \square - 15 = 9 \\ 16 + \square = 23 \\ \square - 10 = 15 \\ 9 + \square = 25 \end{array}$$



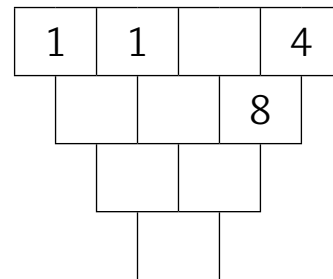
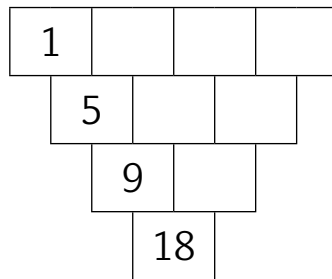
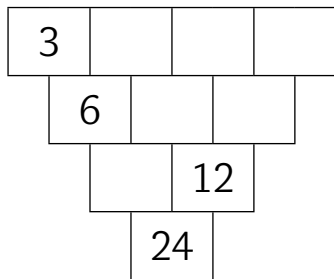
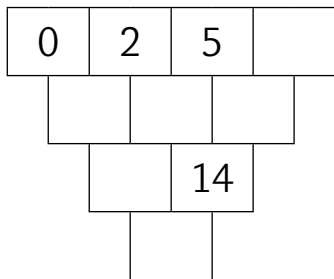
$$\begin{array}{r} 25 - 4 = \square \\ 24 - 5 = \square \\ 12 + 13 = \square \\ 7 + 18 = \square \\ \square - 16 = 8 \\ 8 + \square = 25 \\ \square + 11 = 25 \\ 25 - \square = 11 \end{array}$$



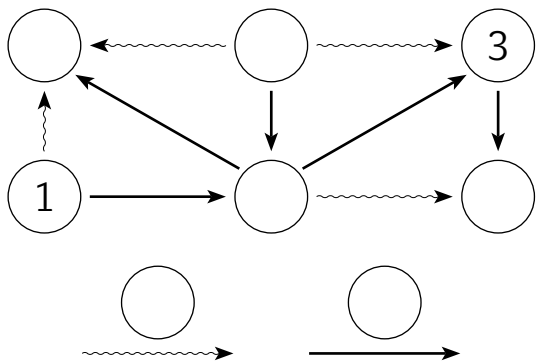
$$\begin{array}{r} 20 - 5 = 17 + \square \\ 25 - 3 = \square + 0 \\ 8 + \square = 15 - 2 \\ \square + 5 = 25 - 2 \\ 10 - \square = 4 + 4 \\ 20 - 3 = \square + 4 \\ 16 + 6 = 24 - \square \\ \square + 6 = 25 - 13 \end{array}$$



2 Vyřeš.



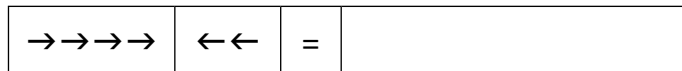
1  Dopln čísla do koleček i k šipkám.



2 Krokuj a vyřeš.




Libor a Jenda stáli vedle sebe.
Libor udělal 4 kroky dopředu a 2 dozadu.
Jenda udělal _____ kroky **dopředu** /
dozadu a stáli oba zase vedle sebe.



3 Dopln tabulku.

Slepice	1		3			
Kozy	1	1		3	2	
Hlavy		3	5			4
Nohy				14	10	10

Na dvorku běhaly slepice a kozy.



12

1 Počítej do 27.

$$\begin{array}{r} \square + 5 = 27 \\ 20 + \square = 26 \\ 10 + 17 = \square \\ 13 + \square = 27 \\ \square + 18 = 26 \\ 20 + \square = 27 \end{array}$$



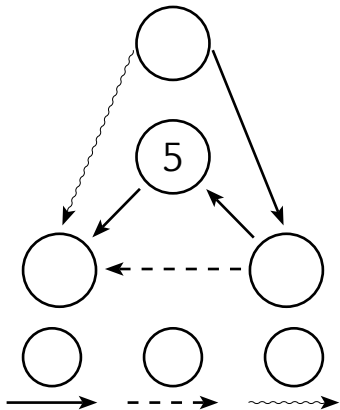
$$\begin{array}{r} 27 - 6 = \square \\ 27 - \square = 17 \\ \square - 8 = 19 \\ 27 - \square = 20 \\ 26 - 13 = \square \\ 27 - \square = 0 \end{array}$$



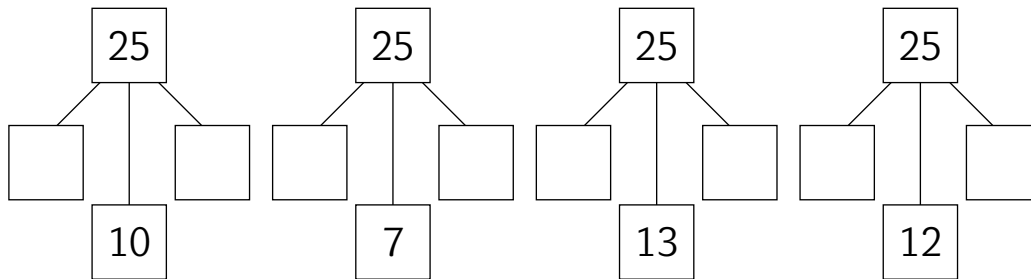
$$\begin{array}{r} 10 + 10 + 7 = \square \\ 12 + 12 + 3 = \square \\ 27 - 7 - 10 = \square \\ 27 - 8 - 9 = \square \\ 27 - 20 - 3 = \square \\ 27 - 18 - \square = 9 \end{array}$$



2 Dopln.




3 Rozděľ na tri čísla, z nichž dvě budou stejná.

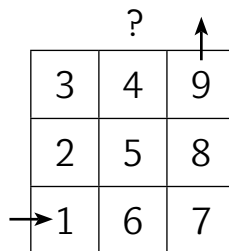
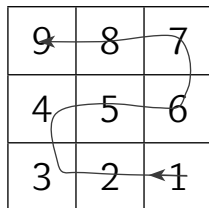


1  Výstaviště.


Výstava hraček se nachází v devíti místnostech. Máš za úkol najít cestu výstavištěm. Do každé místnosti smíš vkročit pouze jednou. Žádnou místnost nesmíš vynechat.



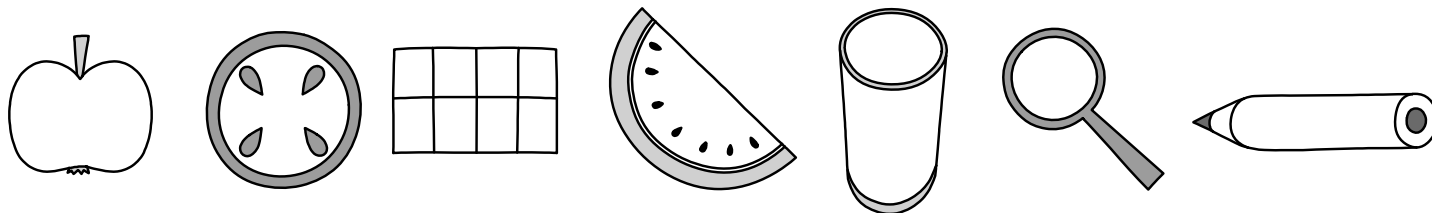
Pepík vyřešil své výstaviště takto:



Mařenka si k řešení výstaviště vystříhala číslice. S jejich pomocí úlohu snadno vyřešila.



2 Vybarvi polovinu.



1 Počítej do 29.

$$19 + 10 = \square$$

$$18 + \square = 29$$

$$\square - 18 = 10$$

$$29 - \square = 20$$

$$17 + 12 = \square$$

$$29 - \square = 27$$

$$\square - 22 = 7$$

$$16 + 13 = \square$$



$$\square + 15 = 29$$

$$29 - \square = 9$$

$$29 - 10 = \square$$

$$9 + \square = 29$$

$$\square - 25 = 3$$

$$28 - \square = 13$$

$$22 + 7 = \square$$

$$\square + 23 = 29$$



$$10 + 19 = 20 + \square$$

$$15 + 3 = \square + 8$$

$$29 - \square = 28 - 9$$

$$\square + 4 = 26 - 9$$

$$28 - \square = 29 - 19$$

$$4 + 16 = \square - 6$$

$$29 - 15 = 7 + \square$$

$$\square - 28 = 27 - 26$$



2 Krokuj a vyřeš.

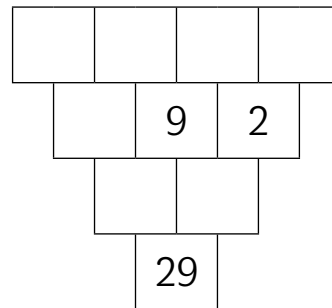
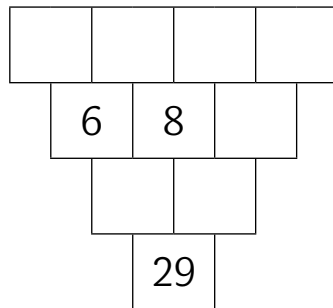
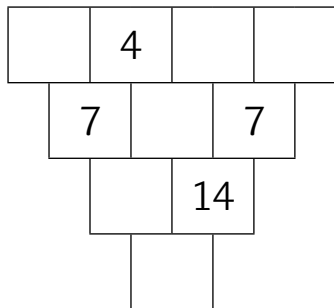
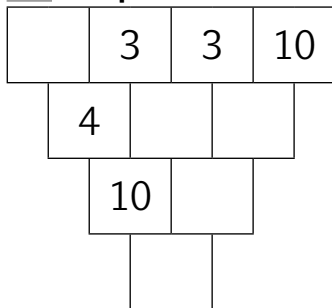


→ →	← ←	→ →	=	
-----	-----	-----	---	--

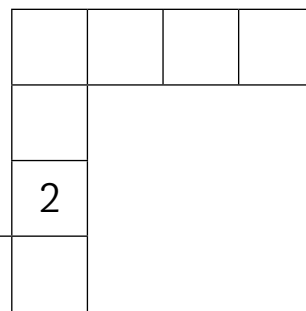
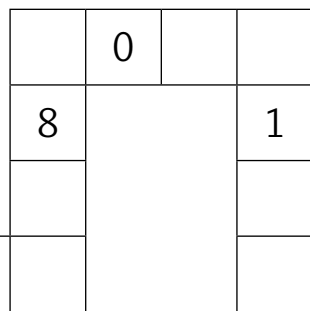
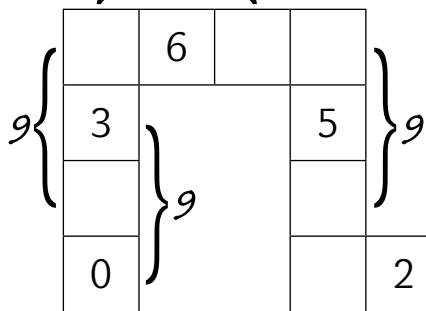
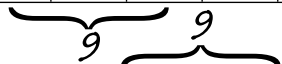
→ →	←	→ →	=	→ →	
-----	---	-----	---	-----	--

15

1 Dopln.



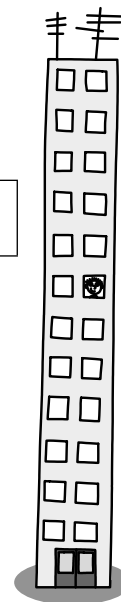
2 Dopln tak, aby byl součet tří sousedních čísel 9.



3 Dopln.

 Bydlíme na _____ podlaží.

Jarda bydlí 3 podlaží nad námi. Erika bydlí na 10. podlaží hned nad Jardou.



16

1 Počítej do 30.

20	+	10	=	<input type="text"/>
22	+	7	=	<input type="text"/>
14	+	15	=	<input type="text"/>
17	+	13	=	<input type="text"/>
<input type="text"/>	+	20	=	30
15	+	<input type="text"/>	=	30
<input type="text"/>	+	23	=	29



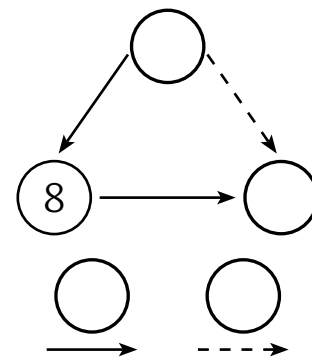
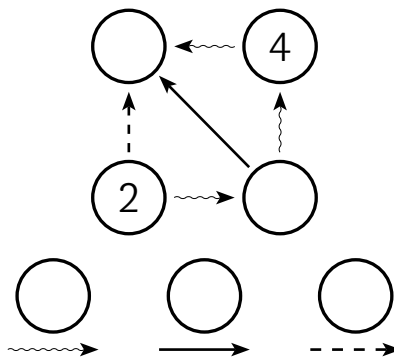
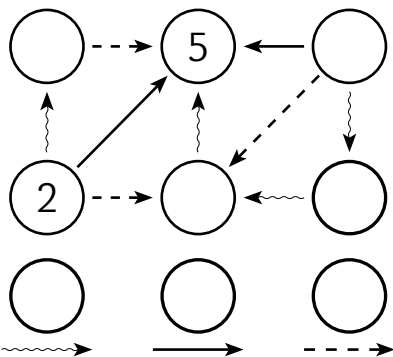
30	-	30	=	<input type="text"/>
30	-	5	=	<input type="text"/>
30	-	16	=	<input type="text"/>
29	-	18	=	<input type="text"/>
<input type="text"/>	-	19	=	9
30	-	<input type="text"/>	=	4
<input type="text"/>	-	20	=	10



10	+	10	+	10	=	<input type="text"/>
11	+	8	+	9	=	<input type="text"/>
30	-	10	-	10	=	<input type="text"/>
30	-	9	-	9	=	<input type="text"/>
30	-	8	-	8	=	<input type="text"/>
30	-	7	-	<input type="text"/>	=	16
6	+	<input type="text"/>	+	16	=	28




2 Vyřeš.




1 🌲 Zvířátka dědy Lesoně

Uprostřed lesů zahrádka,
v ní Lesonova zvířátka.
Kdepak, ndrží se stranou!
Budou hrát přetahovanou.
Silnému se slabší staví,
velice je ta hra baví!
A my nyní vyzkoumáme,
kdo z nich vítězem se stane.



$$\heartsuit \heartsuit = \odot$$



$$\heartsuit \odot = \blacktriangle$$

2 Zapiš ikonami.











3 Doplň znaménko >, <, = .

$$\heartsuit \square \odot$$

$$\blacktriangle \square \blacktriangle$$

$$\heartsuit \heartsuit \square \odot$$

$$\blacktriangle \square \heartsuit$$

$$\odot \odot \square \blacktriangle$$

$$\heartsuit \heartsuit \square \blacktriangle$$

18

1 Doplně >, <, = .

20 + 10	<input type="text"/>	30 - 2
13 + 14	<input type="text"/>	29 - 6
30 - 8	<input type="text"/>	16 + 12



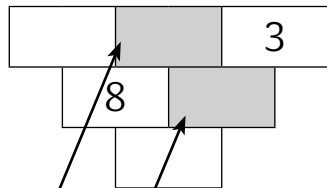
30 - 12	<input type="text"/>	11 + 5
9 + 18	<input type="text"/>	17 + 7
30 - 14	<input type="text"/>	29 - 12



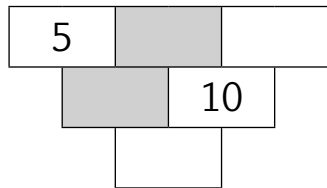
18 + 8	<input type="text"/>	30 - 6
28 - 9	<input type="text"/>	6 + 13
6 + 17	<input type="text"/>	28 - 6



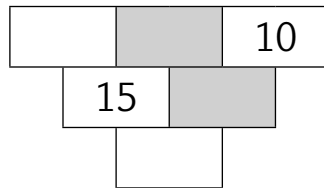
2 Doplně.



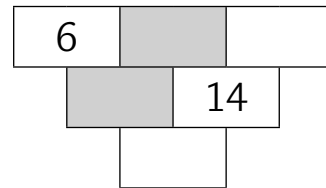
<input type="text"/>	+	<input type="text"/>	=	11
----------------------	---	----------------------	---	----



<input type="text"/>	+	<input type="text"/>	=	15
----------------------	---	----------------------	---	----

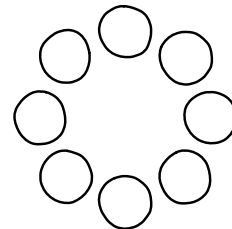

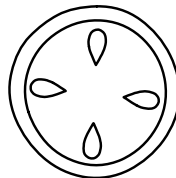
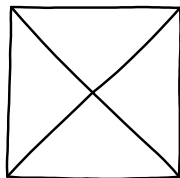
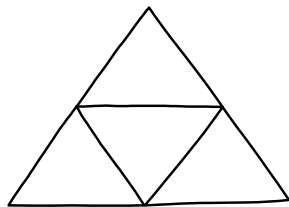



<input type="text"/>	+	<input type="text"/>	=	20
----------------------	---	----------------------	---	----



<input type="text"/>	+	<input type="text"/>	=	18
----------------------	---	----------------------	---	----

3 Vybarvi čtvrtinu.



1 Počítej do 35.

30	+	5	=	
27	+	6	=	
28	+	7	=	
24	+	11	=	
32	+	3	=	
29	+	5	=	
19	+	15	=	
9	+	25	=	



35	-	4	=	
35	-	5	=	
35	-	6	=	
35	-	7	=	
35	-	8	=	
35	-	9	=	
35	-	10	=	
35	-	20	=	




2 Doplně +, - .

22		6		7	=	35
22		6		7	=	21
22		6		7	=	9
22		7		6	=	21
22		7		6	=	23
22		7		6	=	9
7		6		22	=	23
7		6		22	=	35



3 Spoj k sobě stejně silná družstva.




1 Vystřihni číslice, vyřeš výstaviště, číslice přilep na správné místo.


	2	11	
5			8

	2		
		8	5
11			

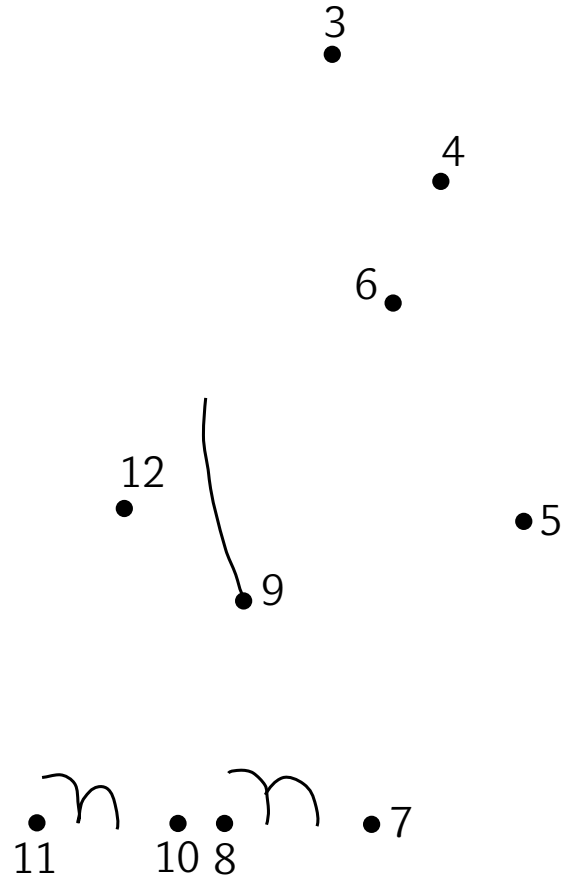
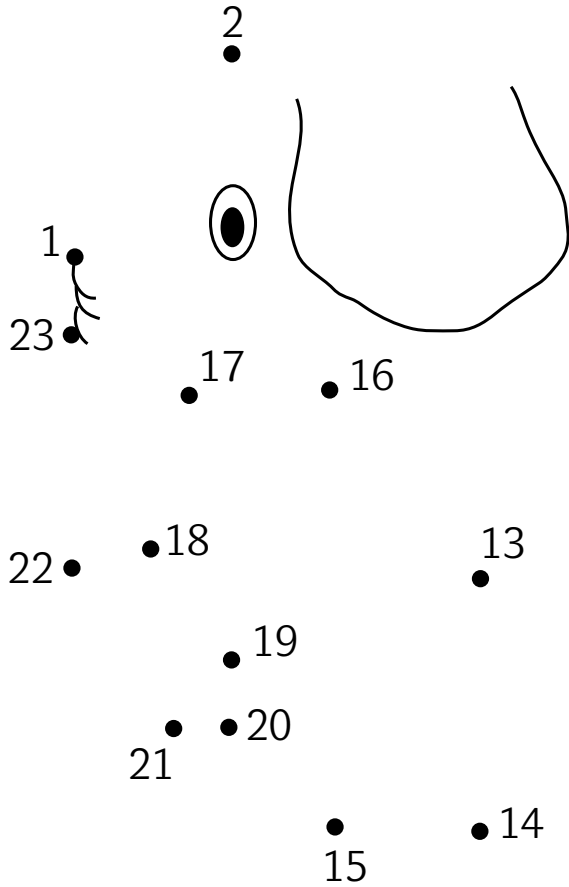
1	3	4	6
7	9	10	12



1	3	4	6
7	9	10	12



1 Spoj body podle pravítka.



1 Počítej do 40.

$$\begin{array}{r}
 20 + 20 = \square \\
 10 + 30 = \square \\
 40 - 10 = \square \\
 40 - 30 = \square \\
 \square + 10 = 20 \\
 20 + \square = 30 \\
 \square - 20 = 10 \\
 40 - \square = 20
 \end{array}$$



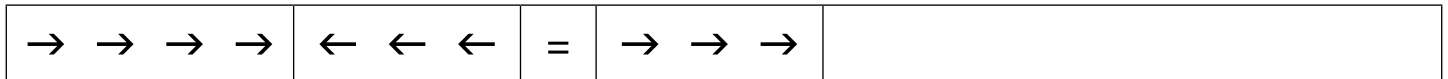
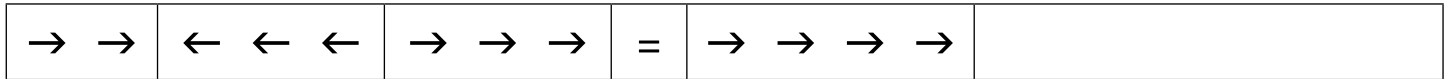

$$\begin{array}{r}
 36 + 4 = \square \\
 26 + 13 = \square \\
 40 - 8 = \square \\
 40 - 16 = \square \\
 \square + 28 = 40 \\
 5 + \square = 40 \\
 \square - 21 = 19 \\
 40 - \square = 3
 \end{array}$$



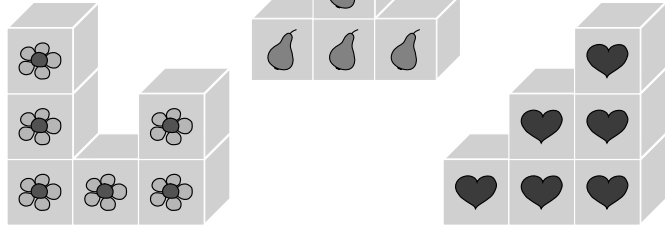
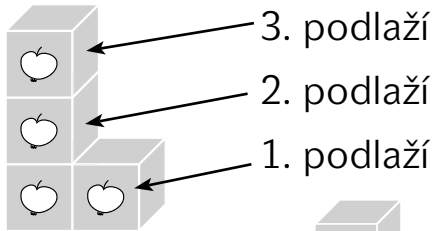
$$\begin{array}{r}
 15 + 25 = \square + 24 \\
 13 + \square = 22 + 18 \\
 40 - 12 = 38 - \square \\
 \square - 7 = 40 - 12 \\
 40 - 20 = \square - 7 \\
 5 + \square = 40 - 19 \\
 18 + 9 = 40 - \square \\
 \square - 31 = 3 + 6
 \end{array}$$



2 Krokuj a vyřeš.



1 Dopln tabulku.



				
Počet krychlí na 1. podlaží	2			
Počet krychlí na 2. podlaží	1			
Počet krychlí na 3. podlaží	1			
Počet krychlí celkem	4			

2 Dopln tak, aby byl součet všech tří sousedních čísel 12.

4	4	
		4
	4	

5	3	
		3
3		

		6
	12	

1 Násobení 2 a 3.

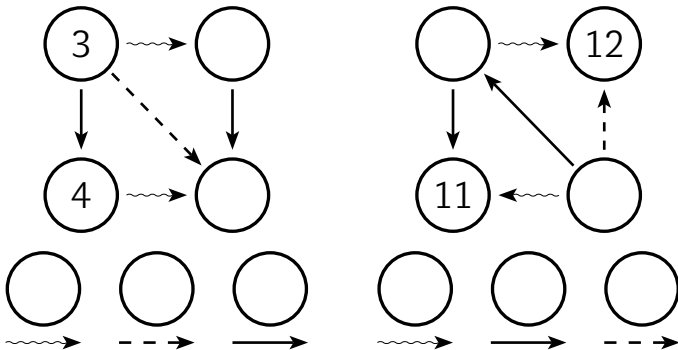
$$\begin{array}{l} 2 \cdot 0 = \square \\ 2 \cdot 3 = \square \\ 3 \cdot 1 = \square \\ 2 \cdot 1 = \square \\ 3 \cdot 2 = \square \\ 3 \cdot 0 = \square \\ 3 \cdot 3 = \square \end{array}$$



$$\begin{array}{l} 2 \cdot 3 + 12 = \square \\ 2 \cdot 0 + 39 = \square \\ 3 \cdot 1 - 2 = \square \\ 2 \cdot 1 + 29 = \square \\ 3 \cdot 0 + 40 = \square \\ 2 \cdot 2 + 18 = \square \\ 3 \cdot 2 - 6 = \square \end{array}$$



$$\begin{array}{l} 40 - \square = 2 \cdot 2 \\ 3 \cdot 3 = \square + 4 \\ \square - 33 = 2 \cdot 3 \\ 0 \cdot 3 = 26 - \square \\ 33 - \square = 1 \cdot 3 \\ 3 \cdot 2 = \square - 20 \\ \square - 12 = 2 \cdot 3 \end{array}$$

2  Dopln.3  Zahraj si autobus a vyřeš.




Na zastávku ŠKOLA přijelo 8 lidí,

5 vystoupilo a 9 nastoupilo.

Od zastávky ŠKOLA odjelo _____ lidí.

Zvířátka dědy Lesoně.

1 Zapiš ikonami.

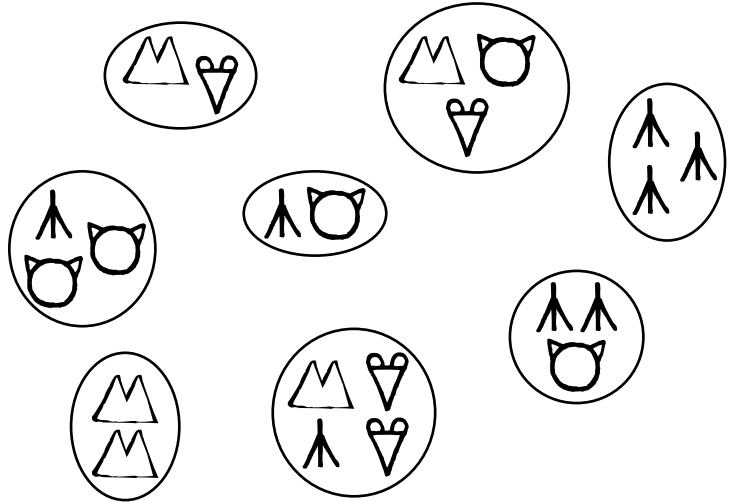


=

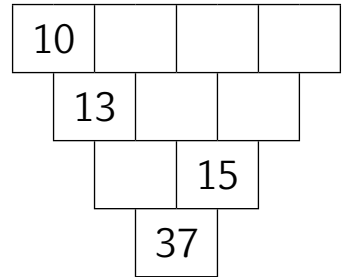
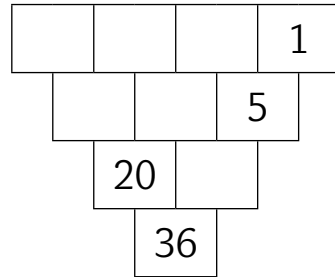
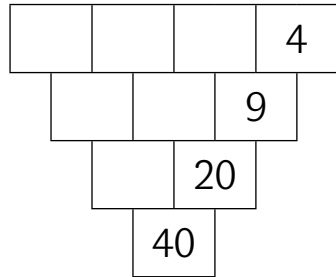
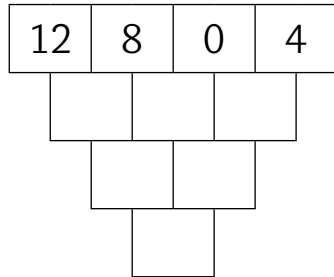
= _____

= _____

2 Spoj k sobě stejně silná družstva.



3 Vyřeš.



1 Počítej do 50.

25 + 25 =	<input type="text"/>
43 + 8 =	<input type="text"/>
50 - 40 =	<input type="text"/>
50 - 44 =	<input type="text"/>
28 + 19 =	<input type="text"/>
50 - 34 =	<input type="text"/>
50 - 24 =	<input type="text"/>
20 + 30 =	<input type="text"/>



10 + 40 =	<input type="text"/>
34 + 16 =	<input type="text"/>
50 - 2 =	<input type="text"/>
50 - 22 =	<input type="text"/>
26 + 17 =	<input type="text"/>
50 - 12 =	<input type="text"/>
39 + 8 =	<input type="text"/>
50 - 32 =	<input type="text"/>

**2 Násobení 4.**

1 . 4 =	<input type="text"/>
4 . 3 =	<input type="text"/>
5 . 4 =	<input type="text"/>
2 . 2 =	<input type="text"/>
2 . 5 =	<input type="text"/>
4 . 4 =	<input type="text"/>
6 . 3 =	<input type="text"/>
4 . 0 =	<input type="text"/>

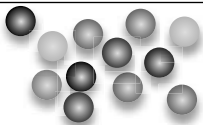


6 . 4 =	<input type="text"/>
3 . 3 =	<input type="text"/>
0 . 2 =	<input type="text"/>
2 . 4 =	<input type="text"/>
5 . 3 =	<input type="text"/>
2 . 3 =	<input type="text"/>
3 . 4 =	<input type="text"/>
4 . 4 =	<input type="text"/>

**3 Vypočítej úlohu.**

Pavlinka měla 27 korálků, tedy o 8 více než Lukáš. Tereзка měla o 6 korálků více než Pavlinka.

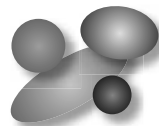
Lukáš měl _____ korálků.



Tereзка měla _____ korálků.

4 Vypočítej úlohu.

Lenka má 3 sáčky bonbónů.



Lenka má dohromady 12 bonbónů.

V každém sáčku jsou _____ bonbóny.

1 Počítej do 60.

$$\begin{array}{r} 45 + 6 = \square \\ 48 + 9 = \square \\ 44 + 7 = \square \\ 46 + 7 = \square \\ 48 + 6 = \square \\ 49 + 9 = \square \\ 48 + 12 = \square \\ 47 + 13 = \square \end{array}$$



$$\begin{array}{r} 58 - 9 = \square \\ 56 - 7 = \square \\ 52 - 6 = \square \\ 57 - 9 = \square \\ 59 - 19 = \square \\ 60 - 18 = \square \\ 60 - 28 = \square \\ 60 - 38 = \square \end{array}$$



$$\begin{array}{r} 3 \cdot 4 + 48 = \square \\ 60 - 30 + \square = 50 \\ 4 \cdot 4 + 44 = \square \\ 58 - 28 + \square = 59 \\ 3 \cdot 3 + 51 = \square \\ 45 - 15 + \square = 55 \\ 3 \cdot 2 + 46 = \square \\ 36 - 17 + \square = 60 \end{array}$$



2 Vypočítej úlohu.

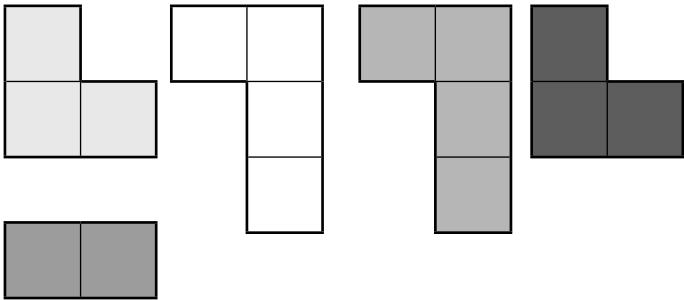
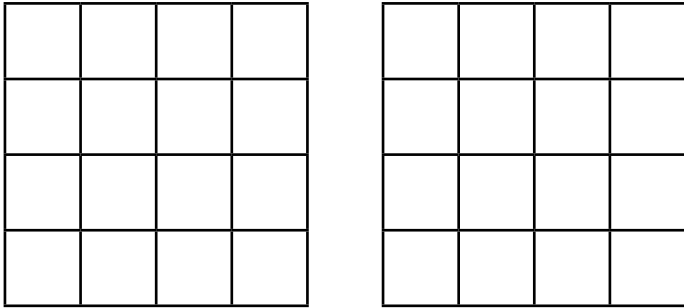

Jana a Lukáš mají dohromady 45 Kč. Jana má 3 mince a Lukáš 4. Přesto má Jana o 5 Kč více než Lukáš. Které mince má Jana a které Lukáš?

Jana má _____ Kč, _____ Kč a _____ Kč.

Lukáš má _____ Kč, _____ Kč, _____ Kč a _____ Kč.



1 Pokryj podlahu parketami.



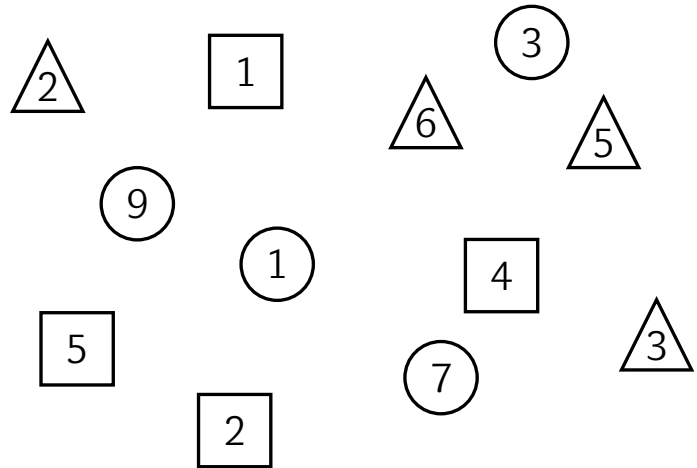
2 Spoj tři čísla tak, aby vyšlo 12.

$$12 = \triangle + \bigcirc + \square$$

$$12 = \triangle + \bigcirc + \square$$

$$12 = \triangle + \bigcirc + \square$$

$$12 = \triangle + \bigcirc + \square$$



1 Násobení 5 a 6.

$$\begin{array}{l} 4 \cdot 5 = \square \\ 3 \cdot 3 = \square \\ 1 \cdot 5 = \square \\ 4 \cdot 4 = \square \\ 5 \cdot 3 = \square \\ 2 \cdot 3 = \square \\ 5 \cdot 0 = \square \\ 5 \cdot 5 = \square \end{array}$$



$$\begin{array}{l} 2 \cdot 5 = \square \\ 0 \cdot 5 = \square \\ 3 \cdot 4 = \square \\ 5 \cdot 5 = \square \\ 3 \cdot 5 = \square \\ 3 \cdot 2 = \square \\ 5 \cdot 4 = \square \\ 2 \cdot 2 = \square \end{array}$$



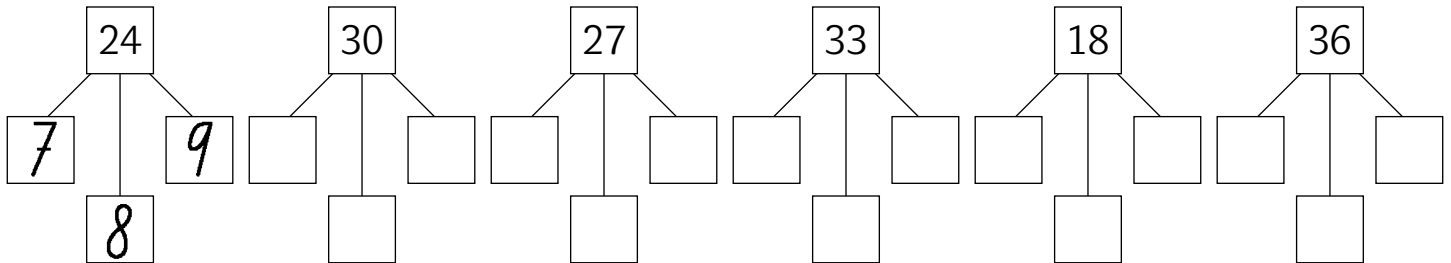
$$\begin{array}{l} 1 \cdot 6 = \square \\ 5 \cdot 5 = \square \\ 4 \cdot 6 = \square \\ 3 \cdot 4 = \square \\ 6 \cdot 3 = \square \\ 5 \cdot 6 = \square \\ 3 \cdot 5 = \square \\ 6 \cdot 6 = \square \end{array}$$



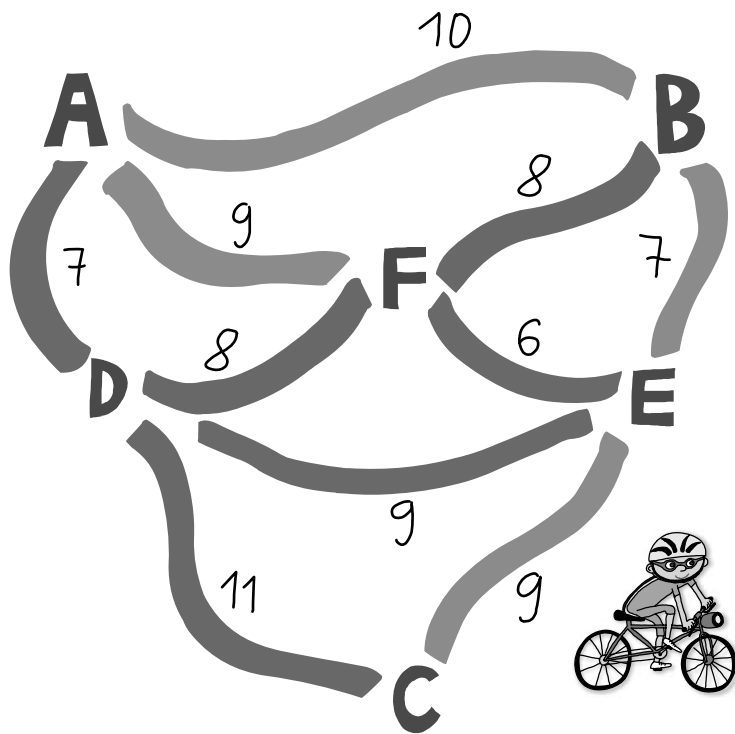
$$\begin{array}{l} 6 \cdot 6 = \square \\ 2 \cdot 6 = \square \\ 4 \cdot 5 = \square \\ 2 \cdot 5 = \square \\ 3 \cdot 6 = \square \\ 4 \cdot 4 = \square \\ 6 \cdot 4 = \square \\ 3 \cdot 3 = \square \end{array}$$



2 Rozděl na tři hned po sobě následující čísla.



1 Děti se chlubil, jak dlouhou trasu ujely.



Aleš ujel trasu **A-B-E-F-A**, ujel celkem

_____ km. _____

Bedřich ujel trasu **A-F-E-B-A**, ujel celkem

_____ km. _____

Čeněk ujel trasu **A-D-C-E-F-A**, ujel

celkem _____ km. _____

David ujel trasu **A-B-F-D-A**, ujel celkem

_____ km. _____

Franta ujel trasu **A-F-E-D-A**, ujel celkem

_____ km. _____

Nejdelší trasu ujel _____. Aleš ujel trasu stejně dlouhou jako _____.

Franta ujel o _____ km méně než Aleš a o _____ km méně než David.

Čeněk ujel o 10 km více než _____.

1 Počítej do 70.

$$52 + 10 = \square$$

$$48 + 20 = \square$$

$$70 - 20 = \square$$

$$70 - 2 = \square$$

$$\square + 7 = 66$$

$$58 + \square = 63$$

$$\square - 42 = 28$$

$$70 - \square = 18$$



$$35 + 35 = \square$$

$$10 + 59 = \square$$

$$70 - 12 = \square$$

$$70 - 62 = \square$$

$$\square + 3 = 66$$

$$38 + \square = 63$$

$$\square - 32 = 38$$

$$70 - \square = 48$$



$$\square \cdot 4 = 6 + 2$$

$$69 - \square = 3 \cdot 0$$

$$70 - 54 = \square \cdot 4$$

$$1 \cdot 3 = 66 - \square$$

$$3 \cdot 4 = \square + 5$$

$$70 - \square = 2 \cdot 2$$

$$\square \cdot 2 = 1 \cdot 4$$

$$3 \cdot 3 = 6 + \square$$



2 Dopln zviřátko tak, aby byla obě družstva stejně silná.

$$\triangle = \blacktriangle \underline{\hspace{1cm}}$$

$$\triangle \text{cat} = \blacktriangle \underline{\hspace{1cm}}$$

$$\triangle \heartsuit \heartsuit = \text{cat} \underline{\hspace{1cm}}$$

$$\triangle = \text{cat} \underline{\hspace{1cm}}$$

$$\triangle \heartsuit = \blacktriangle \underline{\hspace{1cm}}$$

$$\blacktriangle \text{cat} \text{cat} = \blacktriangle \underline{\hspace{1cm}}$$

$$\triangle = \heartsuit \text{cat} \underline{\hspace{1cm}}$$

$$\blacktriangle \triangle \heartsuit = \triangle \underline{\hspace{1cm}}$$

$$\triangle \blacktriangle \heartsuit = \text{cat} \text{cat} \underline{\hspace{1cm}}$$

1 Počítej do 80.

63	+	9	=	
71	+	6	=	
73	+	7	=	
69	+	8	=	
32	+	48	=	
36	+	39	=	
50	+	30	=	
44	+	36	=	



80	-	40	=	
76	-	16	=	
80	-	4	=	
74	-	24	=	
80	-	24	=	
72	-	24	=	
80	-	19	=	
79	-	19	=	



24	+	24	+	24	=	
25	+	25	+	25	=	
26	+	26	+	26	=	
80	-	30	-	30	=	
80	-	35	-	35	=	
80	-	31	-	31	=	
72	+	12	-	34	=	
79	-	26	+	27	=	

2  Vyřeš výstaviště. Hledej více řešení.

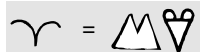



	2	3	

	2	3	


	2	3	

3  Vytvoř vlastní.

1 Zapiš ikonami.



2 Spoj k sobě stejně silná družstva.



3 Kamil a Lucka řeší násobkový obdélník.

„Mezi 4 a 2 bude osmička, protože $4 \cdot 2$ je 8,“ říká Kamil.

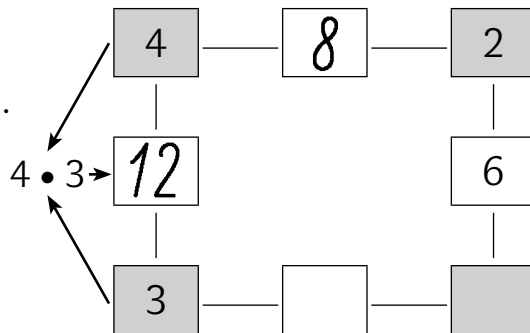
„Mezi 4 a 3 bude 12, protože $4 \cdot 3 = 12$,“ povídá Lucka.

„Ale nevím, co bude pod šestkou.“

„Pod šestkou bude 3, protože tři krát dva je šest,“

odpoví Kamil.

Zkus obdélník dokončit.



1 Počítej do 90.

$$\begin{array}{r} \square + 40 = 90 \\ 85 + \square = 90 \\ 76 + 14 = \square \\ 32 + \square = 90 \\ \square - 6 = 84 \\ 87 - \square = 79 \\ 90 - 16 = \square \end{array}$$



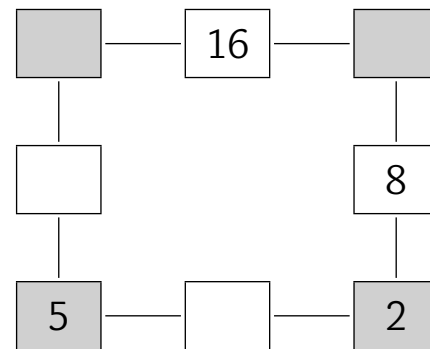
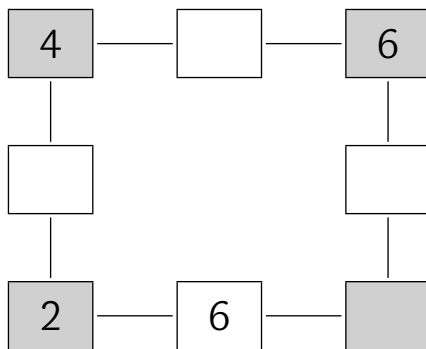
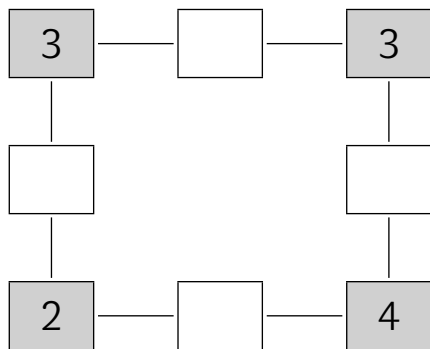
$$\begin{array}{r} 48 + 42 = \square \\ 76 + \square = 83 \\ \square - 14 = 70 \\ 90 - \square = 64 \\ 49 + 39 = \square \\ 2 + \square = 90 \\ \square - 36 = 54 \end{array}$$



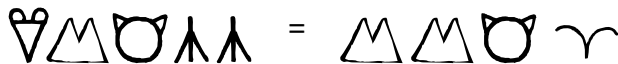
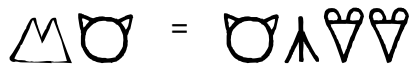
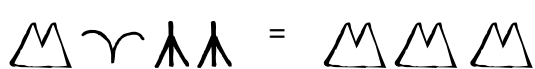
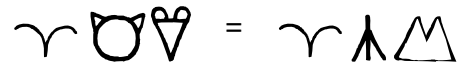
$$\begin{array}{r} 30 + 30 + 30 = \square \\ 45 + 45 = \square + 50 \\ 54 + 30 - 14 = \square \\ 88 - \square = 35 + 35 \\ \square - 60 = 6 \cdot 5 \\ 6 \cdot 6 + 54 = \square \\ 84 - \square = 4 \cdot 6 \end{array}$$



2 Vyřeš násobilkové obdélníky.



1 Škrtni jedno zvířátko tak, aby byla družstva stejně silná.



2 Doplň tabulku.

Na závodisti byli koně a jezdcí. Každý kůň nesl jednoho jezdce. Tři koně a tři jezdci měli dohromady _____ hlav a _____ nohou.

Koně	2	12						
Jezdci			8		11			
Hlavy				6		10		18
Nohy	12						6	24

1 Počítej do 100.

$$\begin{array}{r} 99 + 1 = \square \\ 92 + 8 = \square \\ 100 - 3 = \square \\ 100 - 10 = \square \\ 82 + 18 = \square \\ 72 + 28 = \square \\ 100 - 13 = \square \end{array}$$



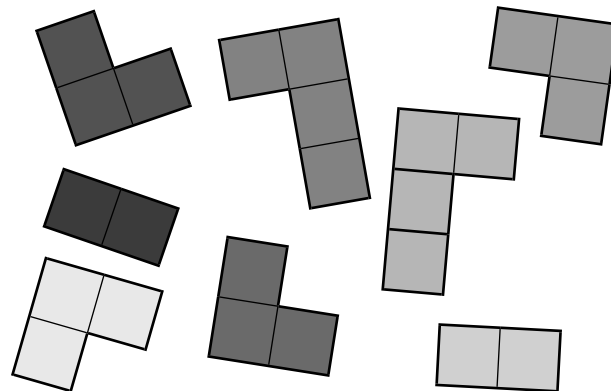
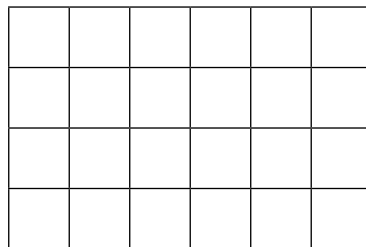

$$\begin{array}{r} 62 + 28 = \square \\ 62 + 30 = \square \\ 90 - 23 = \square \\ 100 - 54 = \square \\ 62 + 34 = \square \\ 62 + 38 = \square \\ 90 - 55 = \square \end{array}$$



$$\begin{array}{r} 33 + 33 + 33 = \square \\ 29 + 29 + \square = 87 \\ 50 + \square - 40 = 60 \\ \square - 64 + 34 = 70 \\ 100 - \square + 25 = 80 \\ 100 - 59 + \square = 90 \\ 65 + 30 - 50 = \square \end{array}$$



2 Pokryj podlahu parketami. Hledej více řešení.



1 Vrať čísla neposedy zpět.

2  Doplně.

	A	B	C	D	E
Vystoupili	0	5	5	5	14
Nastoupili	7				
Jeli	7	9	12		

Nejvíce lidí jelo v autobusu ze zastávky

_____ do zastávky _____ .

Na zastávce _____ přibyli do

autobusu 3 lidé.

40

1 Počítej do 100.

91	+	9	=	<input type="text"/>
83	+	9	=	<input type="text"/>
52	+	7	=	<input type="text"/>
52	+	17	=	<input type="text"/>
52	+	27	=	<input type="text"/>
52	+	47	=	<input type="text"/>
72	+	19	=	<input type="text"/>
63	+	29	=	<input type="text"/>



98	-	7	=	<input type="text"/>
98	-	17	=	<input type="text"/>
98	-	27	=	<input type="text"/>
98	-	57	=	<input type="text"/>
92	-	7	=	<input type="text"/>
92	-	17	=	<input type="text"/>
92	-	27	=	<input type="text"/>
92	-	57	=	<input type="text"/>



3	.	0	+	92	=	<input type="text"/>
5	.	4	+	70	=	<input type="text"/>
6	.	6	+	58	=	<input type="text"/>
3	.	3	+	91	=	<input type="text"/>
6	.	6	-	26	=	<input type="text"/>
2	.	1	+	89	=	<input type="text"/>
3	.	4	+	88	=	<input type="text"/>
5	.	6	+	70	=	<input type="text"/>


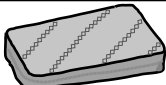


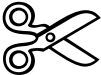





2 Doplněk tak, aby byl součet tří sousedních čísel 12.

	4		7
		6	
5			

	4		5
		4	
3			

1 Kterými mincemi zaplatíš školní potřeby?

Koupil	Cena	Platil					
		1 Kč	2 Kč	5 Kč	10 Kč	20 Kč	
	34 Kč	2	1	4	1	0	$2 + 2 + 20 + 10 = 34$
	79 Kč						
	64 Kč						
	53 Kč						
	85 Kč						
	93 Kč						
	28 Kč						
	46 Kč						

1 Násobení 7.

2	.	7	=	<input type="text"/>
7	.	7	=	<input type="text"/>
7	.	4	=	<input type="text"/>
3	.	7	=	<input type="text"/>
7	.	1	=	<input type="text"/>
7	.	6	=	<input type="text"/>
5	.	7	=	<input type="text"/>
7	.	0	=	<input type="text"/>



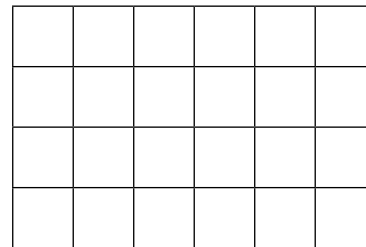

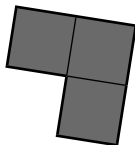
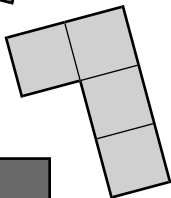

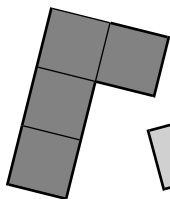
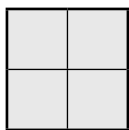
<input type="text"/>	.	7	=	7
4	.	<input type="text"/>	=	28
7	.	7	=	<input type="text"/>
7	.	<input type="text"/>	=	14
<input type="text"/>	.	3	=	21
6	.	<input type="text"/>	=	42
7	.	5	=	<input type="text"/>
7	.	<input type="text"/>	=	0



2	.	7	+	6	=	<input type="text"/>
7	.	7	-	9	=	<input type="text"/>
6	.	7	-	12	=	<input type="text"/>
32	+	32	-	4	=	<input type="text"/>
5	.	7	+	35	=	<input type="text"/>
4	.	6	+	54	=	<input type="text"/>
7	.	3	+	70	=	<input type="text"/>
100	-	50	-	5	=	<input type="text"/>



2 Pokryj podlahu parketami.



1 Vyřeš a vytvoř další úlohy.

Lenka se narodila, když bylo Ludškovi 5 let. Kolik let bude Lence, až budou mít oba dohromady 15 let?


Ludškovi	5	6	7	8	9	10				
Lence	0	1	2							
Dohromady	5	7								

Lence budou _____ .

2 Vytvoř další úlohy.

Až bude Lence 6 let, bude Ludškovi _____ let.

Až budou mít oba dohromady 19 let, bude Ludškovi _____ let a Lence _____ let.



1 Počítej do 100.

$\square - 32 = 68$

$95 - \square = 41$

$65 - 32 = \square$

$100 - \square = 23$

$\square - 41 = 51$

$86 - \square = 11$

$100 - 65 = \square$



$32 + 27 = \square$

$65 + \square = 98$

$\square + 33 = 100$

$27 + \square = 89$

$34 + 62 = \square$

$51 + \square = 87$

$\square + 27 = 90$



$100 - \square = 6 \cdot 6$

$5 \cdot 7 = \square - 65$

$15 + \square = 5 \cdot 6$

$39 + 10 = \square \cdot 7$

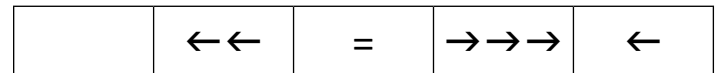
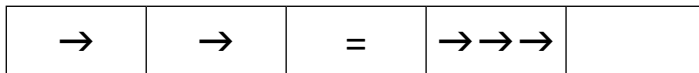
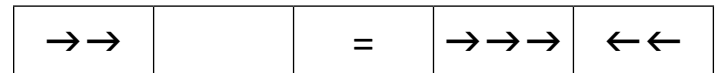
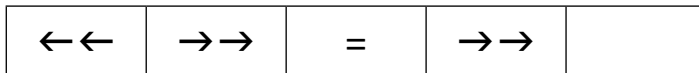
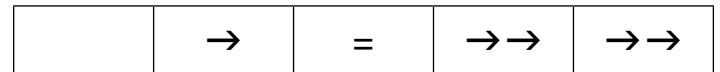
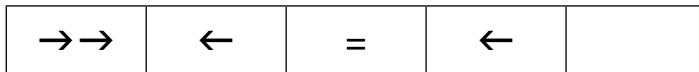
$7 \cdot \square = 100 - 51$

$6 \cdot 4 = \square - 66$


$95 - \square = 6 \cdot 7$



2 Krokuj a vyřeš.



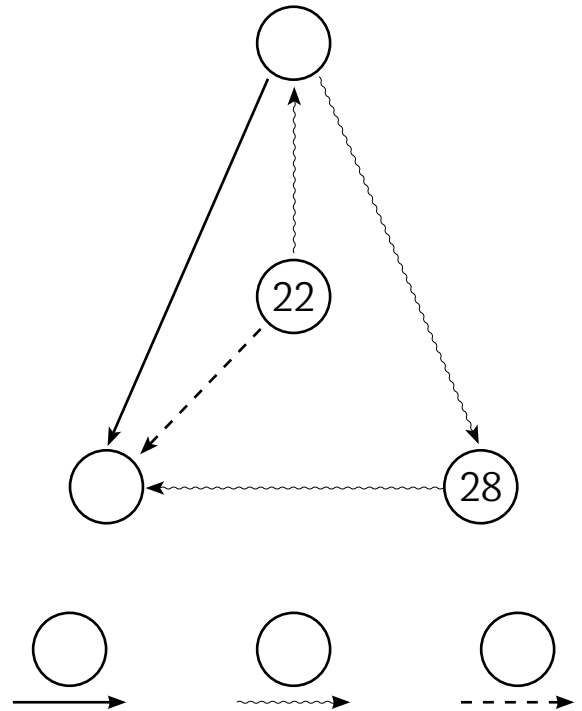
1 Rozděl do dvou stejně silných družstev.



3 Vyřeš úlohu.

Na zastávku ŠKOLA přijelo 6 lidí. 2 lidé vystoupili a _____ osob nastoupilo.
Od zastávky ŠKOLA odjelo 11 lidí.

2  Doplň.



1 Násobení 8.

2	.	8	=	<input type="text"/>
8	.	7	=	<input type="text"/>
7	.	7	=	<input type="text"/>
3	.	8	=	<input type="text"/>
8	.	6	=	<input type="text"/>
5	.	8	=	<input type="text"/>
7	.	6	=	<input type="text"/>
8	.	8	=	<input type="text"/>



1	.	8	=	<input type="text"/>
4	.	8	=	<input type="text"/>
8	.	3	=	<input type="text"/>
6	.	8	=	<input type="text"/>
6	.	7	=	<input type="text"/>
7	.	8	=	<input type="text"/>
8	.	5	=	<input type="text"/>
6	.	6	=	<input type="text"/>



8	.	8	+	36	=	<input type="text"/>
8	.	6	+	<input type="text"/>	=	64
7	.	8	-	50	=	<input type="text"/>
7	.	7	+	<input type="text"/>	=	90
5	.	8	-	18	=	<input type="text"/>
7	.	6	+	<input type="text"/>	=	94
8	.	7	+	44	=	<input type="text"/>
6	.	6	-	<input type="text"/>	=	20




2 Hledej více řešení.

Jana má dvoukorunové a pětikorunové mince, dohromady má 21 Kč.
Kolik má dvoukorunových a kolik pětikorunových mincí?

Dvoukoruny	<input type="text"/>	<input type="text"/>	<input type="text"/>
Pětikoruny	<input type="text"/>	<input type="text"/>	<input type="text"/>




1  Kolik cest vede ven z bludiště?



2 Vyřeš úlohu.

Roman má 8 kuliček.
 Radek má čtyřikrát více.
 Tomáš má o 18 kuliček
 méně než Radek.
 Kolik kuliček mají kluci
 dohromady?



1 Počítej do 100.

$$\begin{array}{r} \square + 7 = 85 \\ 78 + \square = 95 \\ 92 - 6 = \square \\ \square - 16 = 76 \\ 68 + \square = 95 \\ 38 + 37 = \square \\ \square - 36 = 56 \\ 73 - \square = 64 \end{array}$$



$$\begin{array}{r} 56 + 7 = \square \\ 56 + \square = 63 \\ \square - 19 = 54 \\ 73 - 29 = \square \\ 56 + \square = 93 \\ \square + 27 = 83 \\ 93 - 49 = \square \\ 93 - \square = 23 \end{array}$$



$$\begin{array}{r} \square - 10 - 4 = 80 \\ 75 - \square - 20 = 50 \\ 60 + 8 + \square = 98 \\ 60 - 40 + 9 = \square \\ \square - 6 + 10 = 94 \\ 100 - \square + 31 = 81 \\ 84 - 20 + \square = 68 \\ 96 - 30 + 6 = \square \end{array}$$




2 Doplněk tak, aby byl součet tří sousedních čísel 4 a všech osmi čísel 10.

		0	
	2		

		2	
	0		

1 Vypočítej pomocí ikon.

$$\text{☪} = \text{☺} \text{☺} \text{☺}$$



$$\text{☪} = \text{♠} \heartsuit \underline{\hspace{1cm}}$$

$$\text{☪} = \text{♠} \underline{\hspace{1cm}} \quad \text{☪} = \text{♠} \underline{\hspace{1cm}} \quad \text{☪} = \text{♠} \underline{\hspace{1cm}} \quad \text{☪} = \text{☺} \underline{\hspace{1cm}}$$

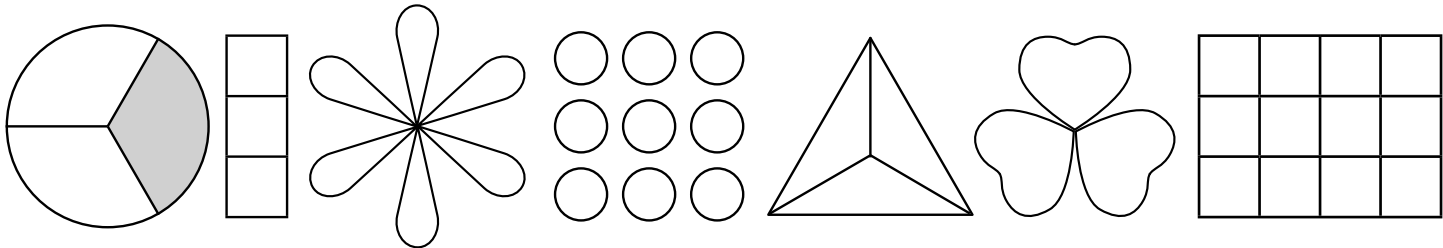
2 Pokračuj a doplň počet.



Bílá A jsou ____ . Šedá A jsou ____ . Bílých ____ je stejně jako šedých.

Celkem je zde ____ bílých polí, ____ šedých polí a ____ různých znaků.

3 Vybarvi třetinu.



1 Počítej do 100.

$$\begin{array}{r} 62 + 6 = \square \\ 62 + 16 = \square \\ 96 - 5 = \square \\ 96 - 15 = \square \\ 62 + 36 = \square \\ 54 + 7 = \square \\ 96 - 25 = \square \end{array}$$



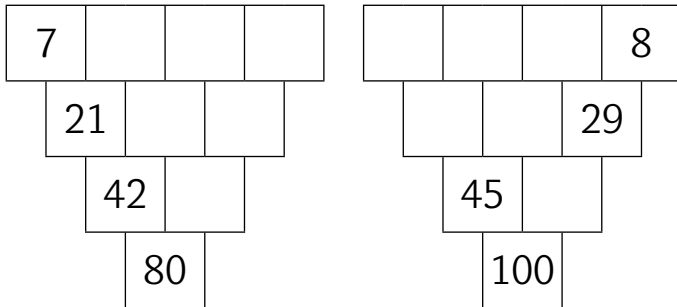
$$\begin{array}{r} 54 + 17 = \square \\ 54 + 27 = \square \\ 93 - 15 = \square \\ 93 - 25 = \square \\ 54 + 37 = \square \\ 54 + 36 = \square \\ 93 - 45 = \square \end{array}$$



$$\begin{array}{r} \square \cdot 6 = 23 + 19 \\ 6 \cdot \square = 50 - 2 \\ 8 \cdot 8 = \square + 12 \\ 7 \cdot 6 = 17 + \square \\ \square \cdot 6 = 96 - 60 \\ 8 \cdot \square = 23 + 33 \\ 7 \cdot 7 = \square - 51 \end{array}$$



2 Vyřeš.



3 Vyřeš úlohu.

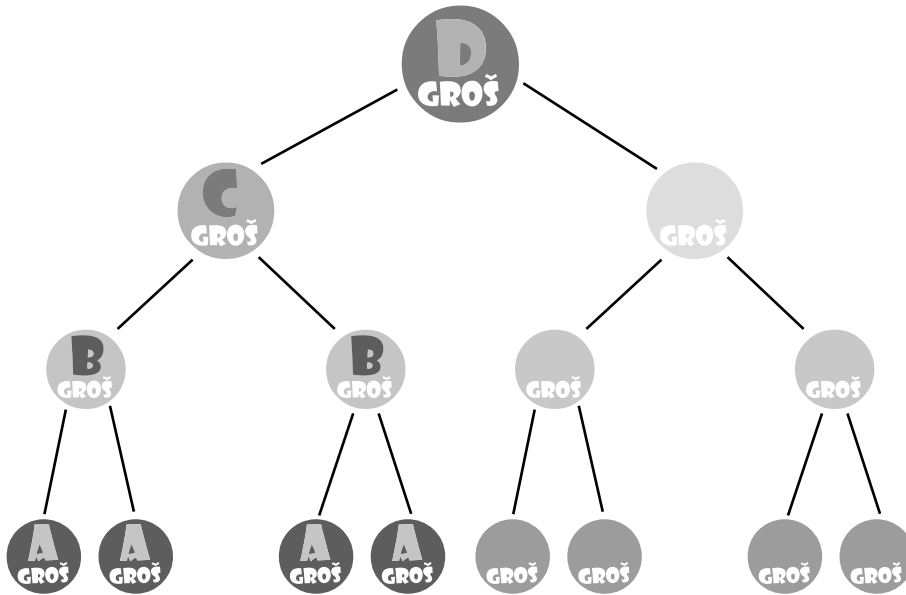
Tomáš má pět mincí. Celkem má 22 Kč.

Tomáš má _____ Kč, _____ Kč, _____ Kč,
_____ Kč, _____ Kč.

Tomáš může mít také _____ Kč, _____ Kč,
_____ Kč, _____ Kč, _____ Kč.

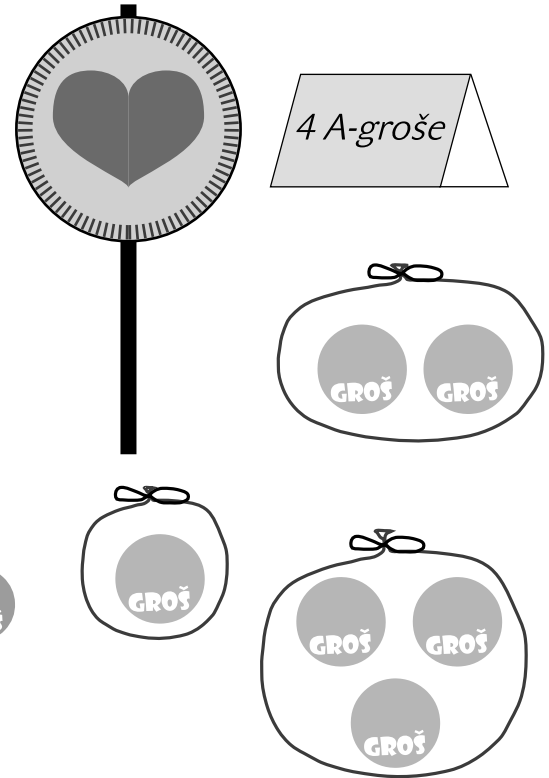
1 Dopln.

V pohádkové zemi zvané BILAND mají 4 různé mince. Nazývají se A-groš, B-groš, C-groš a D-groš. Přitom B-groš je totéž jako dva A-groše, C-groš jako dva B-groše a D-groš jako dva C-groše. Dopln:



2 Vyřeš.

V Bilandu stojí lízátko 4 A-groše. Kterými groši ho můžeš zaplatit?



1 Násobení 9.

1	.	9	=	<input type="text"/>
7	.	9	=	<input type="text"/>
4	.	9	=	<input type="text"/>
9	.	9	=	<input type="text"/>
9	.	6	=	<input type="text"/>
8	.	8	=	<input type="text"/>
5	.	9	=	<input type="text"/>
8	.	7	=	<input type="text"/>



6	.	9	=	<input type="text"/>
7	.	<input type="text"/>	=	56
<input type="text"/>	.	9	=	18
7	.	<input type="text"/>	=	49
8	.	9	=	<input type="text"/>
7	.	<input type="text"/>	=	42
<input type="text"/>	.	9	=	27
9	.	9	=	<input type="text"/>



2	.	3	.	6	=	<input type="text"/>
3	.	3	.	9	=	<input type="text"/>
4	.	2	.	8	=	<input type="text"/>
2	.	2	.	8	=	<input type="text"/>
1	.	5	.	9	=	<input type="text"/>
3	.	3	.	7	=	<input type="text"/>
2	.	4	.	9	=	<input type="text"/>
7	.	1	.	8	=	<input type="text"/>



2 Vyřeš výstaviště.

				19
	3			
		9		
6				

3	6			
		9		19

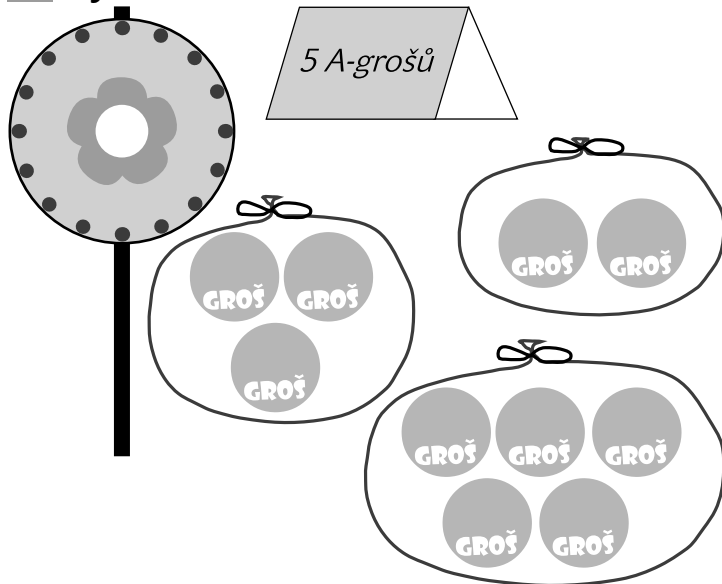
	6			9
3				
	19			

53

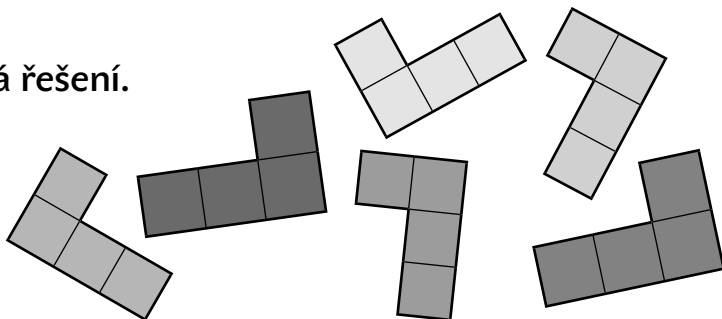
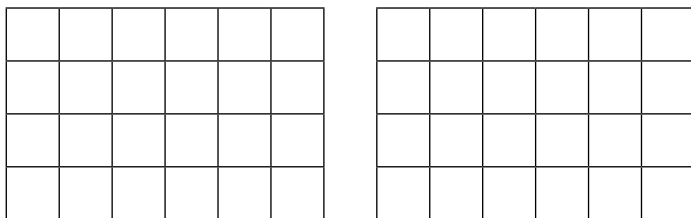
1 Doplň tabulku násobilky.

	1	2	3	4	5	6	7	8	9
1									
2									
3									
4									
5									
6									
7									
8									
9									

2 Vyřeš.



3 Pokryj podlahu parketami. Hledej různá řešení.



1 Počítej do 100.

$$\begin{array}{r} \square - 20 = 76 \\ 85 - \square = 25 \\ 94 - 93 = \square \\ \square - 93 = 7 \\ 100 - \square = 17 \\ 100 - 23 = \square \\ \square - 15 = 80 \end{array}$$



$$\begin{array}{r} 52 + 20 = \square \\ 48 + \square = 88 \\ \square + 40 = 95 \\ 78 + 20 = \square \\ 87 - \square = 86 \\ \square + 5 = 92 \\ 76 + 24 = \square \end{array}$$



$$\begin{array}{r} 100 - 46 = 6 \cdot \square \\ 7 \cdot 6 = \square + 10 \\ 8 \cdot \square = 26 + 38 \\ \square - 21 = 8 \cdot 9 \\ 92 - 43 = 7 \cdot \square \\ 9 \cdot 9 = \square + 39 \\ 37 + \square = 7 \cdot 8 \end{array}$$



2 Které zvířátko má přijít slabšímu družstvu na pomoc?

$$\square \heartsuit \infty = \heartsuit \triangle \square$$

$$\square \triangle \infty = \heartsuit \square$$

$$\square \infty \infty = \heartsuit \heartsuit \triangle \heartsuit \square$$

$$\square \heartsuit = \heartsuit \heartsuit \square$$

$$\square \heartsuit \triangle = \heartsuit \square$$

$$\square \heartsuit \heartsuit \heartsuit = \triangle \square$$

1 Doplně tabulku.

Když byly dvojčatům Otovi a Edovi tři roky, narodila se jejich sestra Ema. Kolik let bude Emě, až bude Edovi 6?

Eda	3	4	5	6	7	8	9	10	11	12
Ota	3	4	5							
Ema	0	1								
Dohromady	6									

Až bude všem dohromady 30 let, bude mít Eda _____ let, Ota _____ a Ema _____ let.

2 Zahraj si autobus a vyřeš tabulku.

	A	B	C	D	E
Vystoupili	-		4		4
Nastoupili		3		1	-
Jeli	4	6	5		

Na zastávce _____ vystoupili 4 lidé.

Na zastávce _____ nastoupili 3 lidé.

Nejvíce lidí jelo v autobusu ze zastávky _____ do zastávky _____ .

1 Násobení 10.

2	·	10	=	<input type="text"/>
6	·	10	=	<input type="text"/>
9	·	10	=	<input type="text"/>
9	·	8	=	<input type="text"/>
7	·	7	=	<input type="text"/>
3	·	10	=	<input type="text"/>
7	·	9	=	<input type="text"/>
7	·	10	=	<input type="text"/>



4	·	10	=	<input type="text"/>
10	·	<input type="text"/>	=	80
<input type="text"/>	·	10	=	30
8	·	<input type="text"/>	=	48
9	·	9	=	<input type="text"/>
5	·	<input type="text"/>	=	50
<input type="text"/>	·	10	=	20
8	·	8	=	<input type="text"/>



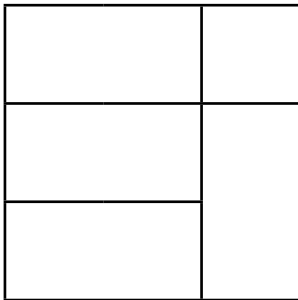
2 Doplně znaménka +, -, ·.

3	·	10	+	70	=	100
9	<input type="text"/>	8	<input type="text"/>	12	=	60
32	<input type="text"/>	32	<input type="text"/>	32	=	96
100	<input type="text"/>	48	<input type="text"/>	12	=	40
9	<input type="text"/>	9	<input type="text"/>	9	=	90
8	<input type="text"/>	8	<input type="text"/>	28	=	92
36	<input type="text"/>	36	<input type="text"/>	26	=	98
100	<input type="text"/>	51	<input type="text"/>	31	=	18




3 Čtverce a obdélníky.

A



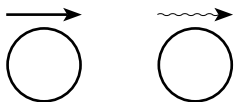
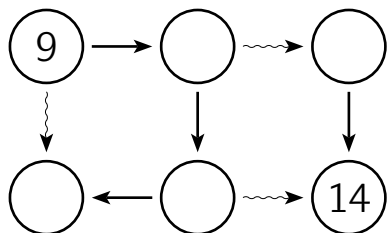
B



Na obrázku A jsou _____ čtverce
a _____ obdélníků.

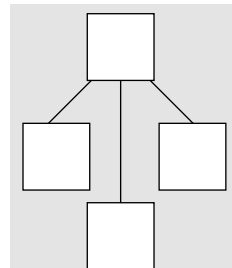
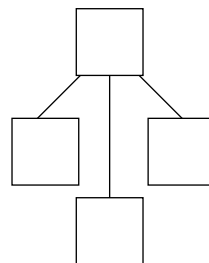
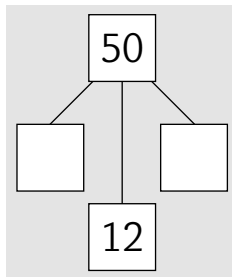
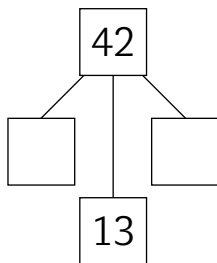
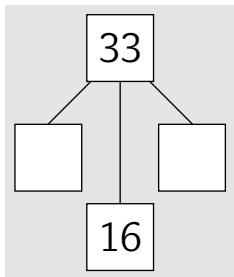
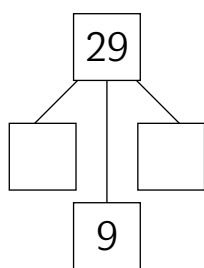
Na obrázku B jsou _____ čtverce
a _____ obdélníků.

Přidej jednu úsečku v obrázku B tak, aby
bylo obdélníků dvakrát tolik.

1  Dopln.

3 Hledej více řešení.


Rozlož na tři čísla, z nichž dvě budou stejná. Která úloha má více řešení?



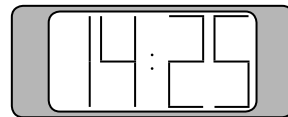
2 Vyřeš.

Anetka přišla na trénink v půl třetí. Valča přišla, když hodinky ukazovaly 14:25. Pavlínka dorazila deset minut po Valče.

První přišla _____, druhá _____ a poslední _____.



Anetka přišla o _____ minut **dříve** / **později** než Pavlínka.



1 Počítáme do 100.

$$\begin{array}{r} \square + 8 = 71 \\ 83 - \square = 81 \\ 83 + 8 = \square \\ 56 + \square = 62 \\ \square - 7 = 84 \\ 94 - \square = 74 \\ 94 - 27 = \square \end{array}$$



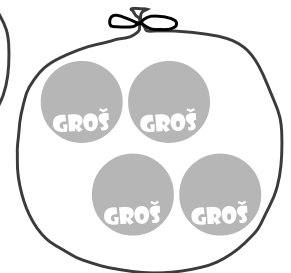
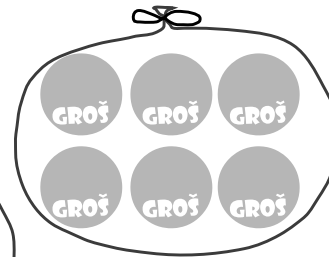
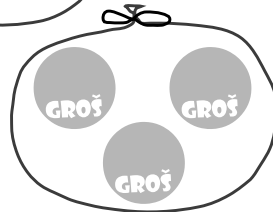
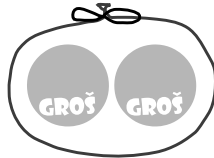
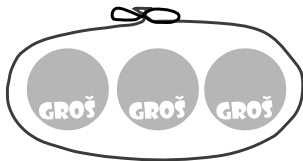
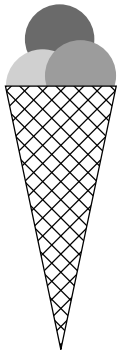
$$\begin{array}{r} 56 + 16 = \square \\ 56 + \square = 92 \\ \square + 8 = 46 \\ 38 + \square = 96 \\ 83 - 6 = \square \\ 83 - \square = 67 \\ \square - 26 = 57 \end{array}$$



$$\begin{array}{r} \square \cdot 9 = 100 - 19 \\ 7 \cdot \square = 100 - 37 \\ 100 - 36 = \square \cdot 8 \\ 100 - 46 = 6 \cdot \square \\ \square \cdot 7 = 100 - 51 \\ 8 \cdot \square = 100 - 44 \\ 100 - 64 = \square \cdot 6 \end{array}$$



2 V Bilandu stojí zmrzlina 6 A-grošů. Kterými groši ji můžeš zaplatit?



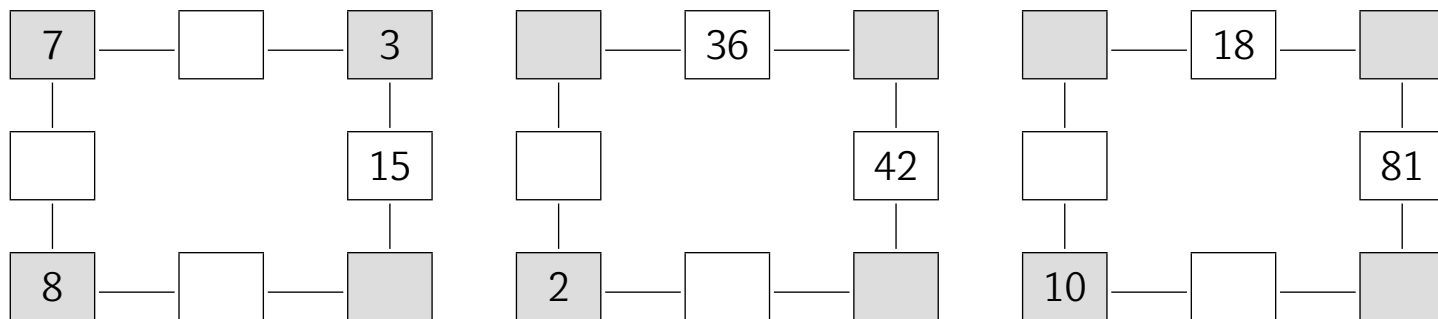
1 Vyřeš úlohu a doplň tabulku. Vytvoř další úlohy.

Po zahradě běhaly ovce a husy. Dohromady měly 5 hlav a 4 křídla. Kolik bylo na zahradě hus a kolik ovcí?

Husy byly _____. Ovce byly _____. 3 ovce a 2 husy měly dohromady _____ nohou.

Husy	2	2			2	
Ovce	1		2			
Hlavy		2	3	4		
Křídla				2		6
Nohy					12	10

2 Vyřeš násobilkové obdélníky.



1 Dopln̄ znaménka +, -, • .

$$2 \quad \square \quad 6 = 12$$

$$57 \quad \square \quad 25 = 32$$

$$48 \quad \square \quad 37 = 85$$

$$3 \quad \square \quad 3 = 9$$

$$73 \quad \square \quad 65 = 8$$

$$43 \quad \square \quad 37 = 80$$

$$6 \quad \square \quad 7 = 42$$

$$9 \quad \square \quad 8 = 72$$

$$64 = 92 \quad \square \quad 28$$

$$48 = 6 \quad \square \quad 8$$

$$37 \quad \square \quad 37 = 74$$

$$60 \quad \square \quad 40 = 100$$

$$56 = 8 \quad \square \quad 7$$

$$60 \quad \square \quad 40 = 20$$



$$10 \quad \square \quad 10 \quad \square \quad 10 = 90$$

$$9 \quad \square \quad 9 \quad \square \quad 19 = 100$$

$$3 \quad \square \quad 4 = 6 \quad \square \quad 6$$

$$100 \quad \square \quad 44 = 7 \quad \square \quad 8$$

$$100 \quad \square \quad 50 \quad \square \quad 25 = 75$$

$$100 = 7 \quad \square \quad 7 \quad \square \quad 51$$

$$5 \quad \square \quad 6 = 15 \quad \square \quad 15$$



2 Krokuj a vyřeš pomocí dvou šipek.

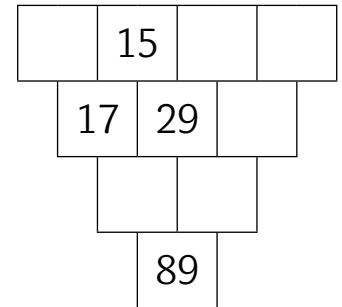
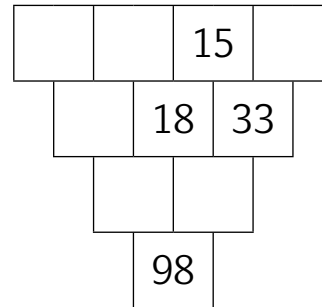


$$\rightarrow \rightarrow \quad \square = \square \quad \square$$

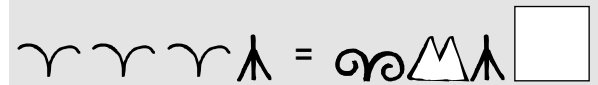
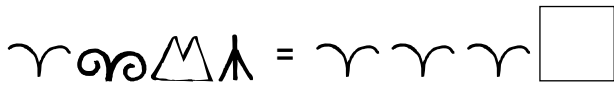
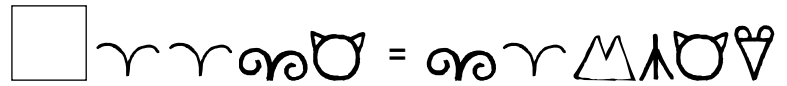
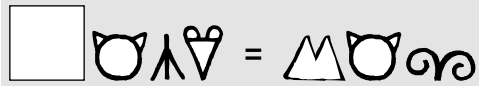
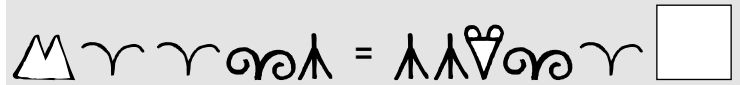
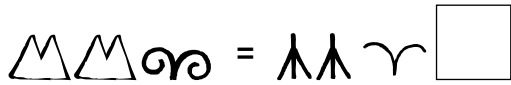
$$\rightarrow \rightarrow \quad \square = \square \quad \square$$

$$\rightarrow \rightarrow \quad \square = \square \quad \square$$

3 Vyřeš součtové trojúhelníky.



1 Které zvířátko má přijít slabšímu družstvu na pomoc?



2 Vyřeš násobilkové obdélníky.

